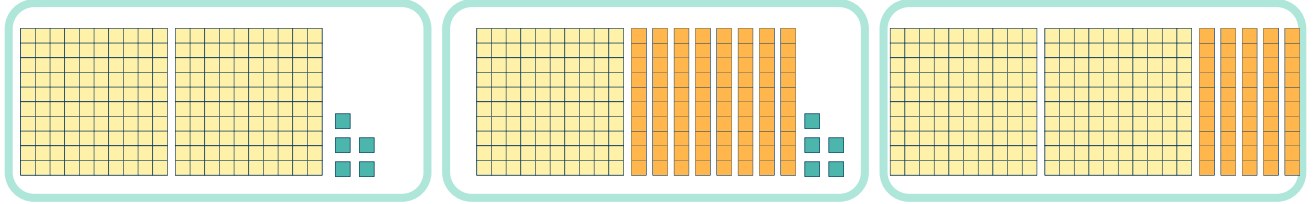


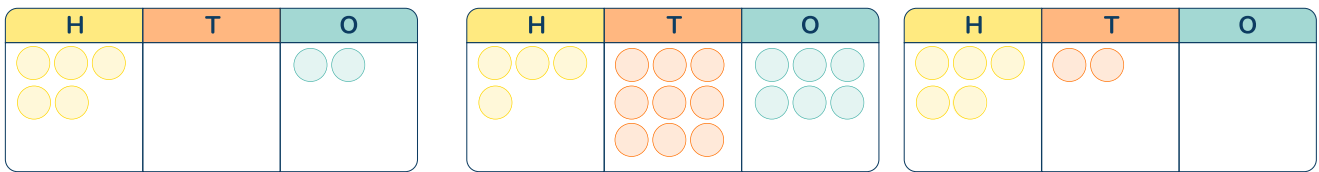
## To know how to order numbers to 1,000

1 Which numbers are shown?

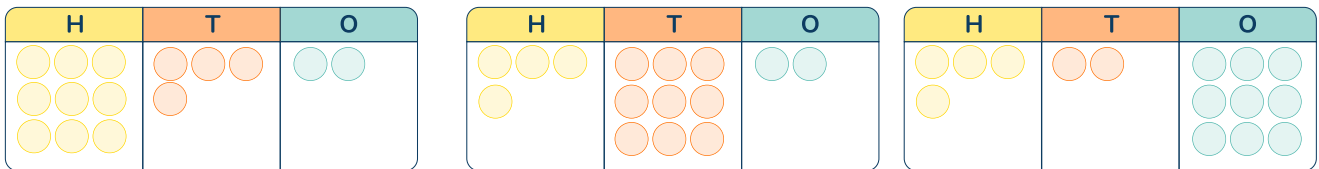


- Write the numbers in descending order.
- Write the numbers in ascending order.

2 a Put the numbers in descending order.



b Put the numbers in ascending order.



3 Class 3 entered a sunflower growing competition.

Here are the heights of their 5 sunflowers.

138cm

118cm

183cm

130cm

134cm

- Write the heights in descending order.
- Write the heights in ascending order.
- Some numbers have been written in ascending order. What could the missing numbers be?

325, , 351, 362, , 380

## To know how to order numbers to 1,000

Question Number	Question	Answer
1	a) Write the numbers in descending order. b) Write the numbers in ascending order.	The numbers are 205, 185 and 250 a) Descending order: 250, 205, 185 b) Ascending order: 185, 205, 250
2	a) Put the numbers in descending order. b) Put the numbers in ascending order.	a) The numbers are 502, 496 and 520, in descending order: 520, 502, 496 b) The numbers are 942, 492 and 429, in ascending order: 429, 492, 942
3	a) Write the heights in descending order. b) Write the heights in ascending order. c) Some numbers have been written in ascending order. What could the missing numbers be?	a) Descending order: 183 cm, 138 cm, 134 cm, 130 cm, 118 cm b) Ascending order: 118 cm, 130 cm, 134 cm, 138 cm, 183 cm c) First number: any number between 326 and 350 Second number: any number between 363 and 37