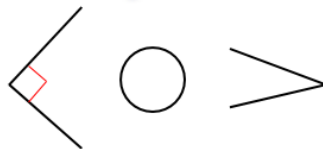


Maths - TT Rockstars – See letter with login details and instructions.


- 1) Compare the angles using $<$ or $>$



- 2) Which shape has exactly two right angles?

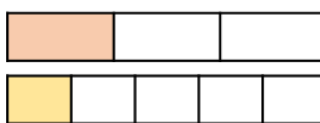


- 3) Which digital clock matches this blue analogue clock?



- 4) Compare using $<$ or $>$

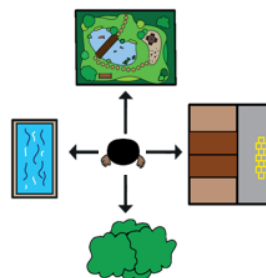
$$\frac{1}{3} \bigcirc \frac{1}{5}$$



- 1) Which shape has four right angles?



- 2) What will Mo be facing **after** he has made a half turn?



- 3) 42 minutes past 6 = minutes to 7

- 4) A pair of gloves costs £3 and 50p.
If Ron pays with a £10 note, how much change will he receive?

English – Make a vocabulary mat of important words relating to Mousehole.

Year 3 - ee/ea/e-e/ie/y/ey

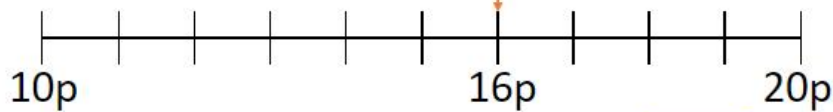
coffee	breeze	screech	valley	squeeze
speech	complete	evening	twenty	hungry

Year 3+

speech	chimney	between	season	journey
thirteen	fourteen	reason	committee	breathe

Maths - TT Rockstars – See letter with login details and instructions.

- 1) 16p is closer to
-
- p than
-
- p

16p rounded to the nearest 10p is

- 2) Which amount is £4.70 equivalent to?
-
- 470p or
-
- 47p

- 3) Write < or > to compare.

5.9 ○ 7.1

0.42 ○ 0.3

- 1) £10 – £2.19 = £
-
- .
-

- 2) Compare the amounts using < or >



- 3) Order the lengths, starting with the
- greatest**
- .

Item	Length
Ribbon	43.7 cm
Pencil	11.5 cm
Ruler	30.0 cm

- 4)
- $344 + 62 =$
-

English – Make a vocabulary mat of important words relating to Mousehole.

Spelling –

Year 4 - Homophones

weather	whether	Who's	whose	medal
meddle	missed	mist	tea	teem

Year 4+

groan	grown	aloud	allowed	guest
guessed	stationary	stationery	steal	steel